


Measure mass

I How much does each object weigh?

a)




The banana weighs

7

cubes.

b)




The tennis ball weighs

9

cubes.

c)




The slice of cake weighs

5


cubes.

2 Draw cubes to balance the scales.

a) The toy car weighs 6 cubes.



b) The sweets weigh 4 cubes.



3 Use cubes to weigh objects in your classroom.
Complete this sentence for each object.

_____ weighs cubes.

Compare answers with a partner.

