

Fluent in Five

Questions and Answers

Year 1

Week 1

Year 1 - Week 1

This week in a nutshell:

Welcome to the first week of Fluent in Five in Year 1.

As children are at the start of their Fluent in Five journey, this week's questions focus on number skills that should have been secured as part of their EYFS experience.

It is suggested that the following manipulatives are available for children to freely select from this week:-

- Number shapes
- Tens frames and counters
- Bead strings
- 0-20 number lines


Fluent in Five

Questions and Answers

Week 1

Day 1

A. $8 + 1 = ?$



Use...

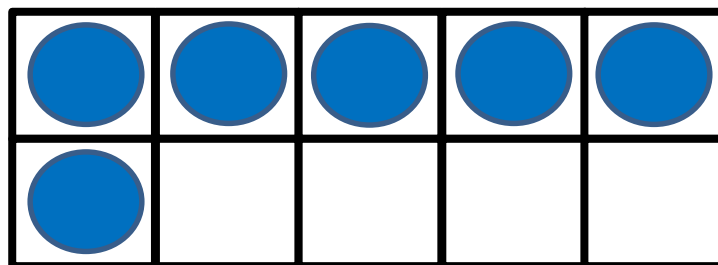
B. $9 - 1 = ?$




Number shapes

...to help you

C. $6 + ? = 10$



$$A. 8 + 1 = 9$$



Use...

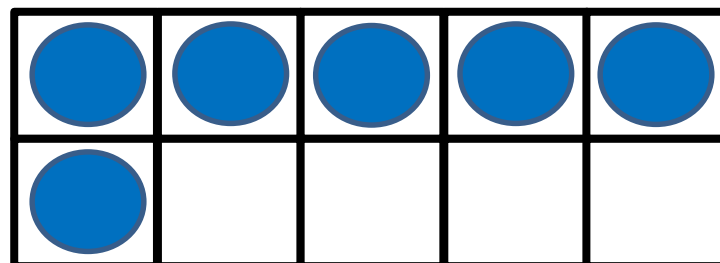
$$B. 9 - 1 = 8$$



Number shapes

...to help you

$$C. 6 + 4 = 10$$




Fluent in Five

Questions and Answers

Week 1

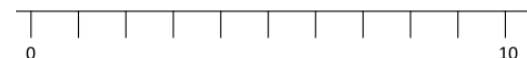
Day 2

A. Double 2 =



Use...


B. $6 + 3 = ?$




A number line

...to help you

C. $8 - 2 = ?$

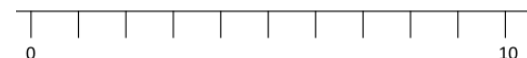


A. Double 2 = 4



Use...


B. $6 + 3 = 9$



A number line

...to help you

C. $8 - 2 = 6$



Fluent in Five

Questions and Answers

Week 1

Day 3

A. Double 3 = ?

Use...



B. $8 + 2 = ?$



C. $11 - 1 = ?$




Use...



A. Double 3 = 6

B. $8 + 2 = 10$



C. $11 - 1 = 10$



Fluent in Five

Questions and Answers

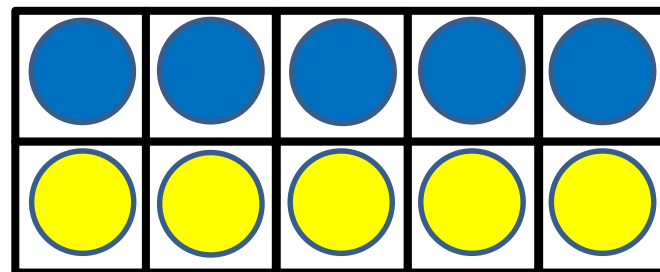
Week 1

Day 4

A. $9 + 1 = ?$



B. Double 5 = ?



C. $10 - 2 = ?$

Use...



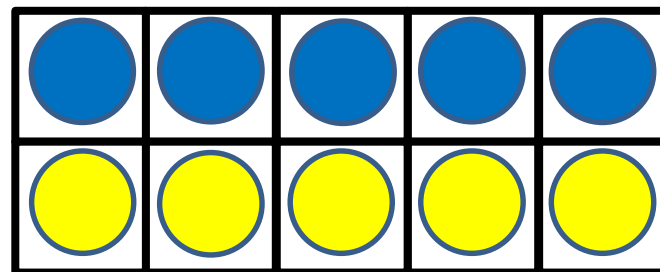
Counters

...to help you

$$A. 9 + 1 = 10$$




$$B. \text{Double } 5 = 10$$



$$C. 10 - 2 = 8$$

Use...



Counters

...to help you


Fluent in Five

Questions and Answers

Week 1

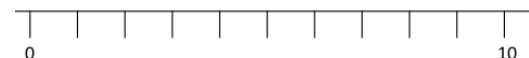
Day 5

A. Double $4 = ?$



Use...

B. $8 - 3 = ?$




A number line

...to help you

C. $14 + 1 = ?$

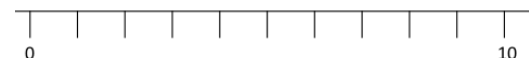


A. Double 4 = 8



Use...

B. $8 - 3 = 5$



A number line

...to help you

C. $14 + 1 = 15$

